

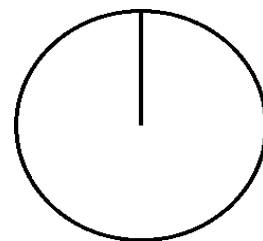
# Pizza-regning (48)

Omregn fra brøk til procent (med 1 decimal) og fra brøk til grader (hele tal).

Tegn derefter procentcirklen

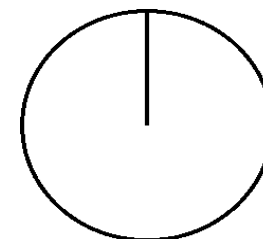
$$\frac{3}{7} = \frac{\cdot 100}{=} =$$

$$\% = \frac{\cdot 360}{=} =$$



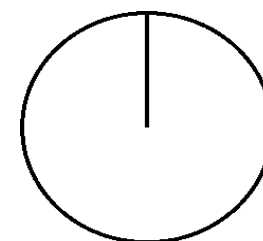
$$\frac{6}{8} = \frac{\cdot 100}{=} =$$

$$\% = \frac{\cdot 360}{=} =$$



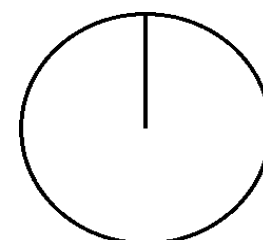
$$\frac{7}{9} = \frac{\cdot 100}{=} =$$

$$\% = \frac{\cdot 360}{=} =$$



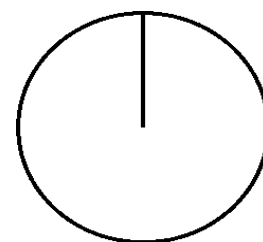
$$\frac{9}{10} = \frac{\cdot 100}{=} =$$

$$\% = \frac{\cdot 360}{=} =$$



$$\frac{1}{20} = \frac{\cdot 100}{=} =$$

$$\% = \frac{\cdot 360}{=} =$$



$$\frac{4}{9} = \frac{\cdot 100}{=} =$$

$$\% = \frac{\cdot 360}{=} =$$

