

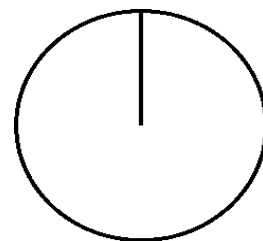
Pizza-regning (50)

Omregn fra brøk til procent (med 1 decimal) og fra brøk til grader (hele tal).

Tegn derefter procentcirklen

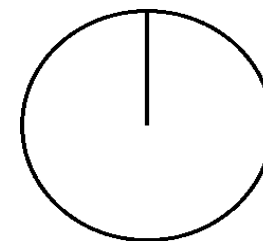
$$\frac{3}{15} = \frac{\cdot 100}{=} =$$

$$\% = \frac{\cdot 360}{=} =$$



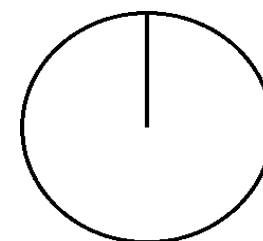
$$\frac{5}{20} = \frac{\cdot 100}{=} =$$

$$\% = \frac{\cdot 360}{=} =$$



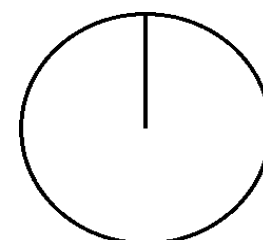
$$\frac{4}{25} = \frac{\cdot 100}{=} =$$

$$\% = \frac{\cdot 360}{=} =$$



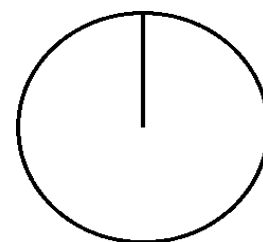
$$\frac{3}{16} = \frac{\cdot 100}{=} =$$

$$\% = \frac{\cdot 360}{=} =$$



$$\frac{10}{25} = \frac{\cdot 100}{=} =$$

$$\% = \frac{\cdot 360}{=} =$$



$$\frac{6}{20} = \frac{\cdot 100}{=} =$$

$$\% = \frac{\cdot 360}{=} =$$

