

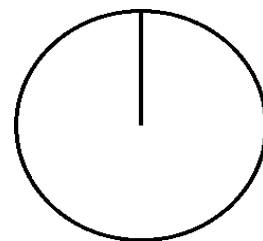
Pizza-regning (52)

Omregn fra brøk til procent (med 1 decimal) og fra brøk til grader (hele tal).

Tegn derefter procentcirklen

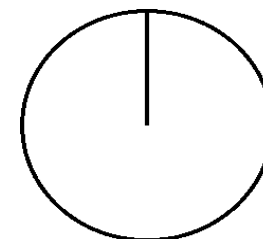
$$\frac{3}{33} = \frac{\cdot 100}{=} =$$

$$\% = \frac{\cdot 360}{=} =$$



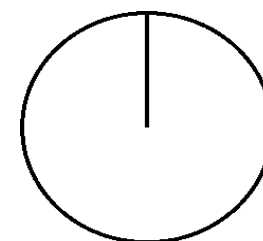
$$\frac{5}{30} = \frac{\cdot 100}{=} =$$

$$\% = \frac{\cdot 360}{=} =$$



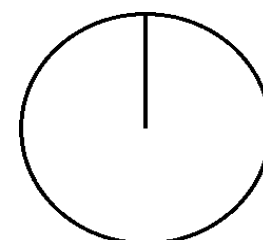
$$\frac{14}{20} = \frac{\cdot 100}{=} =$$

$$\% = \frac{\cdot 360}{=} =$$



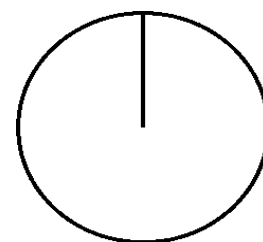
$$\frac{10}{33} = \frac{\cdot 100}{=} =$$

$$\% = \frac{\cdot 360}{=} =$$



$$\frac{15}{75} = \frac{\cdot 100}{=} =$$

$$\% = \frac{\cdot 360}{=} =$$



$$\frac{4}{19} = \frac{\cdot 100}{=} =$$

$$\% = \frac{\cdot 360}{=} =$$

