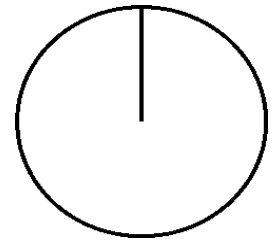


Pizza-regning (57)

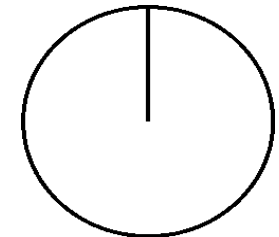
Omregn fra brøk til procent (med 1 decimal) og fra brøk til grader (hele tal).

Tegn derefter procentcirklen

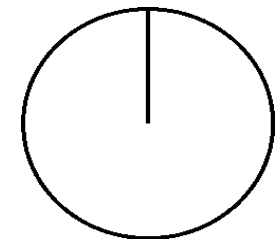
$$\frac{16}{64} = \frac{\quad}{\quad} = \quad \% = \frac{\quad}{\quad} = \quad =$$



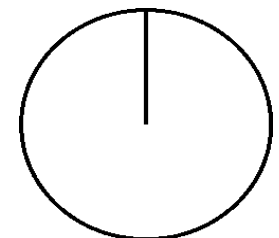
$$\frac{17}{102} = \frac{\quad}{\quad} = \quad \% = \frac{\quad}{\quad} = \quad =$$



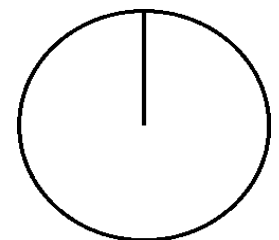
$$\frac{18}{72} = \frac{\quad}{\quad} = \quad \% = \frac{\quad}{\quad} = \quad =$$



$$\frac{15}{90} = \frac{\quad}{\quad} = \quad \% = \frac{\quad}{\quad} = \quad =$$



$$\frac{13}{108} = \frac{\quad}{\quad} = \quad \% = \frac{\quad}{\quad} = \quad =$$



$$\frac{19}{73} = \frac{\quad}{\quad} = \quad \% = \frac{\quad}{\quad} = \quad =$$

